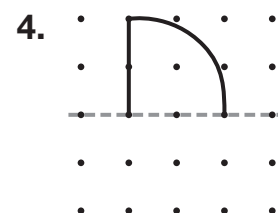
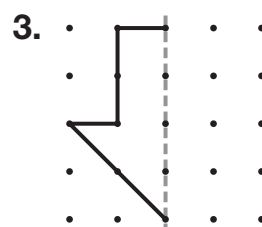
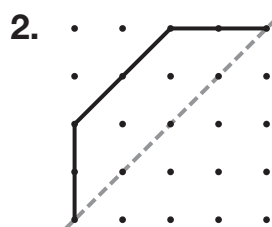
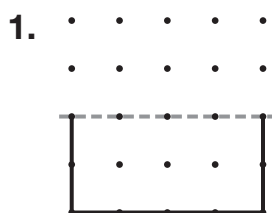


Drawing Shapes with Lines of Symmetry

Complete the figure so the dashed line segment is part of a line of symmetry.



5. **Explain It** How can you use this shape to make a symmetric figure? Classify the shape created.



6. The dashed line is part of a line of symmetry. Which picture completes the figure?

