

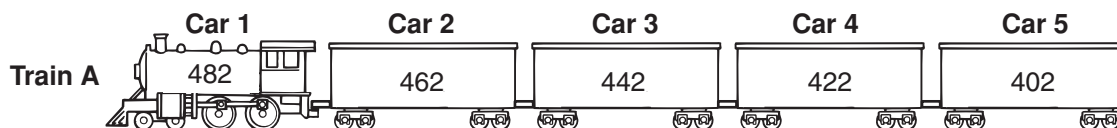
Name _____

Enrichment


3-8

Train-Traction

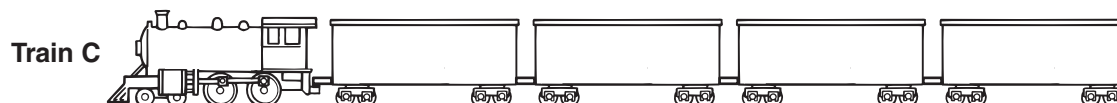
The students in Mrs. Brand's class were asked to find the patterns in a subtraction train.



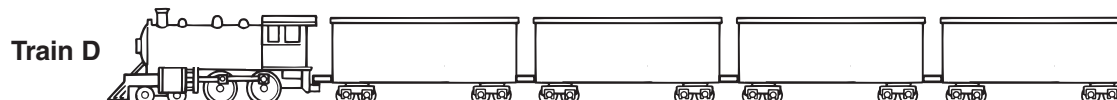
Rule: Subtract 124



1. Write a pattern for the cars in Train A. _____
2. Follow the rule and subtract 124 from each car in Train A. Put your answer in the correct cars in Train B.
3. What is the pattern for the cars in Train B? _____



Rule: Subtract _____



4. Start with a 3-digit number and a pattern of your choice. Fill in the cars in Train C. What is your pattern?

5. Choose a subtraction rule and write it in the space between trains.

6. Follow the subtraction rule to fill in the cars in Train D. What is your number pattern?

