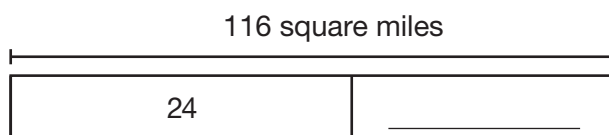


Problem Solving: Draw a Picture and Write a Number Sentence

The table below shows the areas of some of the smallest countries in the world. Use the table for **1–3**.

1. How many square miles greater is Maldives than San Marino?

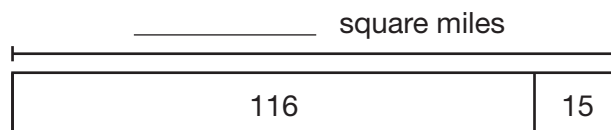


Area of Countries

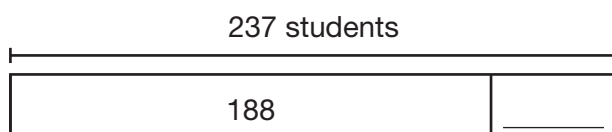
Country	Area (in sq mi)
San Marino	24
Liechtenstein	62
Maldives	116
Palau	177

2. **Draw a Picture** Draw a diagram to show how to find the difference between the areas of Liechtenstein and San Marino. Use your diagram to solve the problem.

3. Grenada is 15 square miles greater than Maldives. What is the area of Grenada?



4. There are 237 students at Johnson Elementary School. There are 188 students at Hoover Elementary School. How many more students are at Johnson than at Hoover?



5. **Write a Problem** Write a real-world problem that you can solve by adding or subtracting. Then give your problem to a classmate to solve.
