


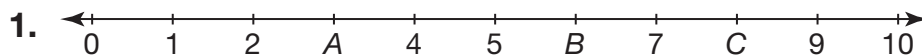
Name \_\_\_\_\_

Practice

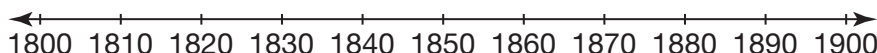
**1-4**

# Understanding Number Lines

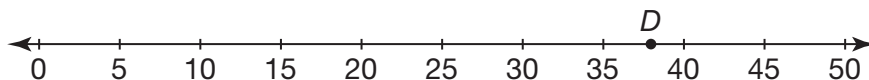
Write the value of  $A$ ,  $B$ , and  $C$  on each number line.



4. Texas became a state in 1845. Draw a point to show where 1845 is on the number line.



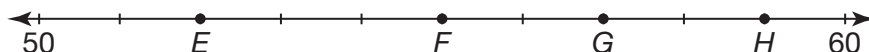
5. **Critique Reasoning** Lara said that point  $D$  has a value of 38. Is her statement reasonable? Explain your answer.



---

---

6. Which letter represents 57 on this number line?



**A**  $E$

**B**  $F$

**C**  $G$

**D**  $H$