

Name _____

Reteaching

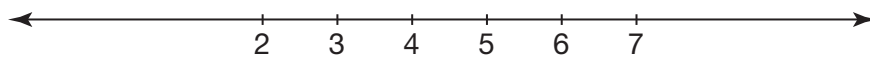
1-4

Understanding Number Lines

The distance between any two numbers on a number line is exactly the same.





You can make the numbers closer together or farther apart. The numbers in the number line below are closer together than the numbers in the number line above.



Both number lines show the same numbers.

Write the value of A and B for each number line.





3. **Reason** Which letter on this number line has the greater value: A or B ? Explain your answer.

