

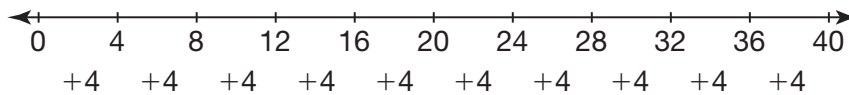
Name _____

Reteaching

1-5

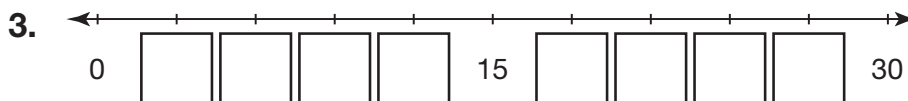
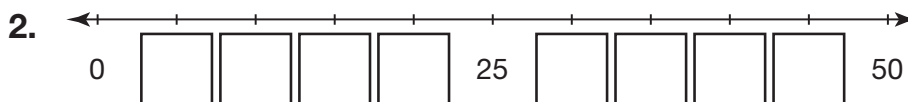
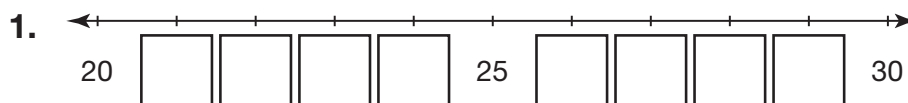
Counting on the Number Line

A number line can be used to show a pattern. No matter what the pattern is, the numbers are the same distance apart.



The pattern is to add 4 to the previous number.

Write the missing numbers on each number line.



4. Use Structure Make a number line from 0 to 60 counting by sixes.

