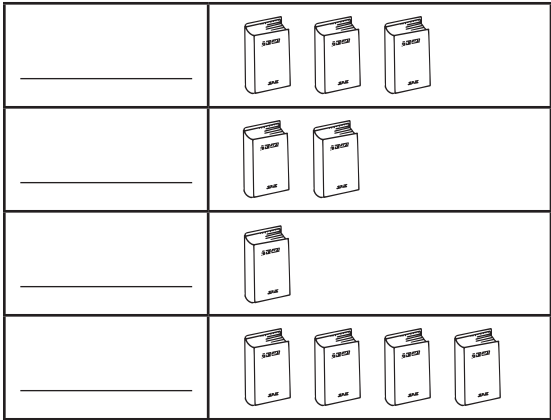


# Read a Pictograph

The pictograph at the right shows the number of books that Eric, Gary, Kim, and Meg read during the summer.


- 1. Use these clues to write the names of the children next to the number of books they have read.
  - Eric has read the least books.
  - Kim has read twice as many books as Gary.
  - Gary has read twice as many books as Eric.

Books Read This Summer

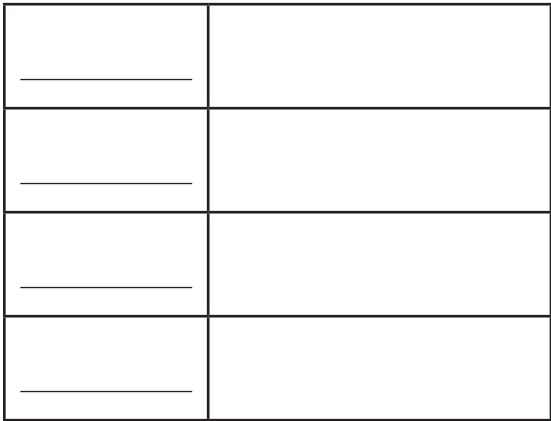


Each  stands for 2 books.

- 2. How many books has each person read?  
Eric \_\_\_\_\_ Gary \_\_\_\_\_ Kim \_\_\_\_\_ Meg \_\_\_\_\_
- 3. How many books have the children read altogether? \_\_\_\_\_
- 4. Write a subtraction sentence to show how many more books Kim read than Eric.  
\_\_\_\_\_

- 5. Show how the pictograph will change if each  stands for 4 books.

Books Read This Summer



Each  stands for 4 books.