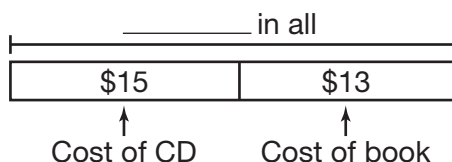
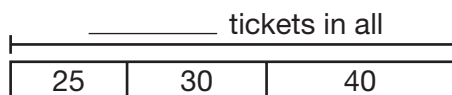


Problem Solving: Draw a Picture

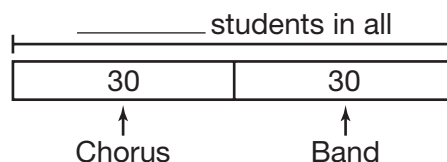
1. Kelly bought a CD for \$15 and a book for \$13. How much money did Kelly spend in all?



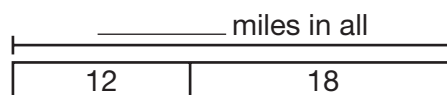
3. Jane sold 25 raffle tickets Monday, 30 raffle tickets Tuesday, and 40 raffle tickets Wednesday. How many raffle tickets did Jane sell all together?



2. **Estimation** There are 28 students in the chorus and 31 students in the band. All will be performing tonight. About how many students will be performing in all?

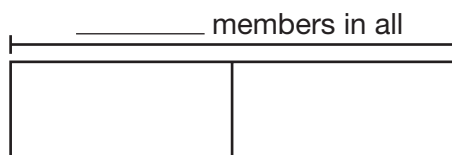


4. Dan cycled 12 miles Saturday and 18 miles Sunday. How many miles did he cycle all together?

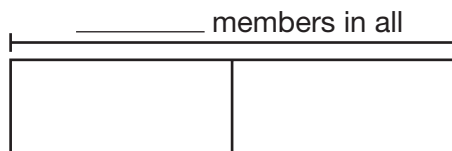


The table shows the number of students who belong to clubs. Use the table for 5 through 7.

5. How many students belong to the Spanish and Science clubs?



6. About how many students belong to the Math and Spanish clubs?



Club Membership

Club	Members
Math	24
Spanish	18
Running	15
Science	6

7. How many students belong to the Math, Running, and Science clubs?

