



# Multiplying Shapes

Look at the chart. It shows the number of sides that each kind of shape has.

1. What is the total number of sides in this design?



Write a multiplication sentence for the problem.

| Sides of Shapes  |                 |
|--|-----------------|
| Shape  | Number of Sides |
| <br>triangle | 3               |
| <br>square   | 4               |

2. What is the total number of sides in this design?



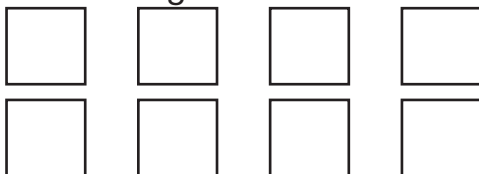
Write a multiplication sentence for the problem.

3. What is the total number of sides in this design?



Write a multiplication sentence for the problem.

4. What is the total number of sides in this design?



Write a multiplication sentence for the problem.

5. Make your own design.

Total number of sides \_\_\_\_\_

Write a multiplication sentence for your design.