

Name _____

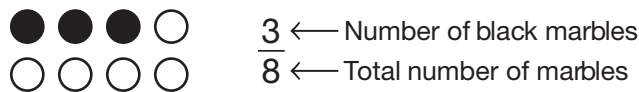
Reteaching

9-3

Fractions and Sets


A fraction can name part of a group.

What fraction of the marbles are black?

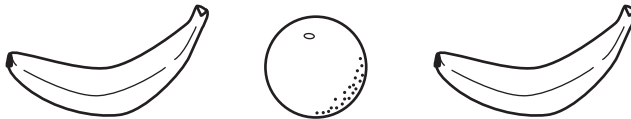


$\frac{3}{8}$ of the marbles are black.


1. What fraction of the toys are balls? _____



2. What fraction of the fruits are oranges? _____



3. What fraction of the blocks have letters on them? _____



4. What fraction of the letters in the word Monday is *M*? _____

For **5** and **6** draw a picture to show each fraction of a set.

5. $\frac{3}{6}$ of the squares are shaded.

6. $\frac{2}{3}$ of the balls are footballs.

7. **Reason** Out of 6 cats, 2 are tan. What fraction of cats are **NOT** tan? _____