

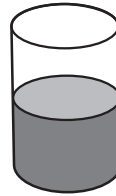
Name _____

Fill the Cups

Match each drawing to the fraction that each figure represents.

1. $\frac{2}{3}$ _____

A



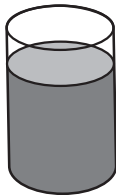
2. $\frac{1}{4}$ _____

B




3. $\frac{1}{2}$ _____

C



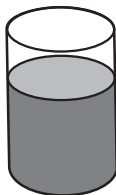
4. $\frac{3}{4}$ _____

D



5. $\frac{1}{3}$ _____

E



6. Write the fractions in order from least to greatest.
