

Name _____

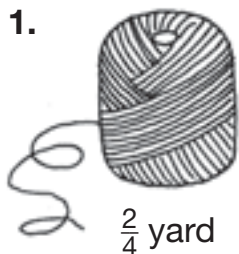
Enrichment

10-4

Comparing Fractions on the Number Line

Solve each problem. Draw the number lines.
Find the greater fraction. Write $>$ or $<$.

1.




$\frac{2}{4}$ yard




$\frac{1}{4}$ yard

$$\frac{2}{4} \bigcirc \frac{1}{4}$$

2.



$\frac{3}{8}$ yard




$\frac{5}{8}$ yard

$$\frac{3}{8} \bigcirc \frac{5}{8}$$

3.



$\frac{1}{2}$ yard



$\frac{1}{4}$ yard

$$\frac{1}{2} \bigcirc \frac{1}{4}$$

4.



$\frac{1}{8}$ yard

$\frac{1}{4}$ yard

$$\frac{1}{8} \bigcirc \frac{1}{4}$$